

Meten 8A

Eiland: Schaal

Doel: Berekenen van de schaal via opmeten





Liniaal



Potlood

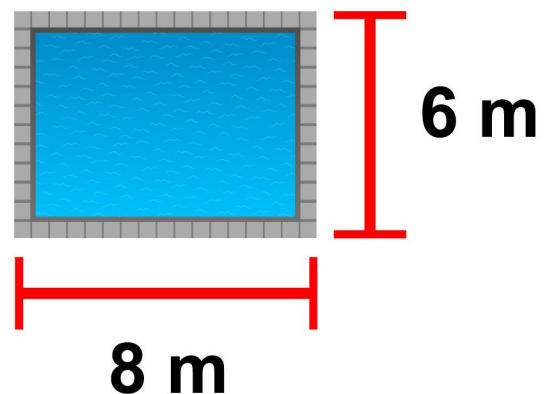
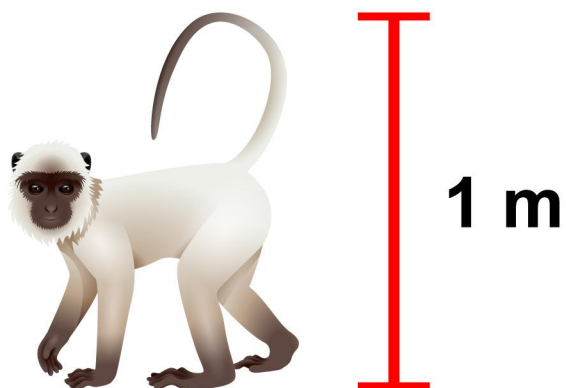
Opgave 1 Wat is de schaal? 1 : _____

Opgave 2 Wat is de schaal? 1 : _____

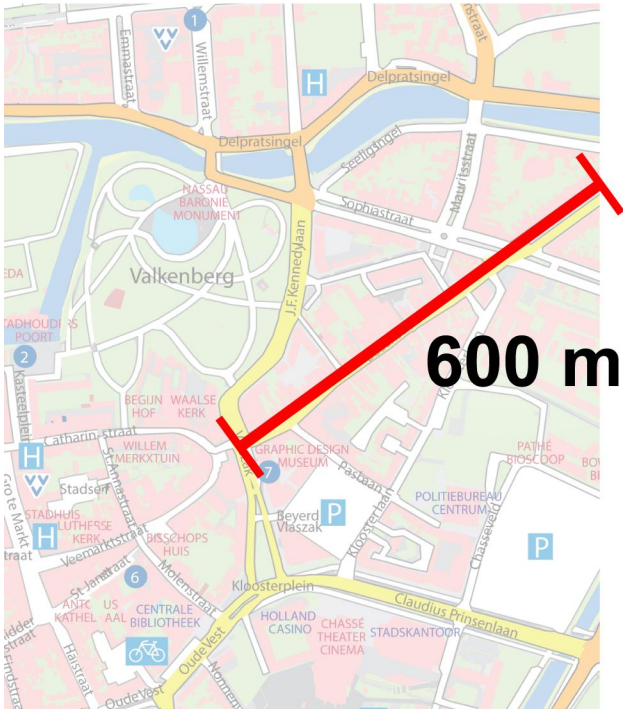


Opgave 3 Wat is de schaal? 1 : _____

Opgave 4 Wat is de schaal? 1 : _____



Opgave 5 Wat is de schaal? 1 : _____



Opgave 6 Wat is de schaal? 1 : _____



Opgave 7 Wat is de schaal? 1 : _____



Opgave 8 Wat is de schaal? 1 : _____

