

## Meten 14C



**Eiland:** Berekenen van omtrek  
**Doel:** Berekenen van een omtrek met schaal via opmeten

**Opgave 1** Wat is de omtrek van het toilet?

\_\_\_\_\_m

**Opgave 2** Wat is de omtrek van de speelkamer?

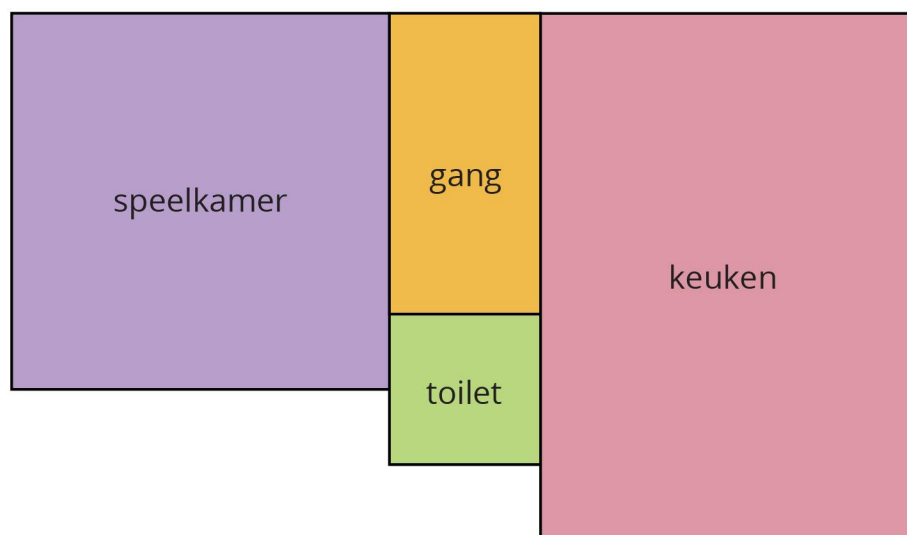
\_\_\_\_\_m

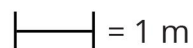
**Opgave 3** Wat is de omtrek van de gang?

\_\_\_\_\_m


**Opgave 4** Wat is de omtrek van de keuken?

\_\_\_\_\_m



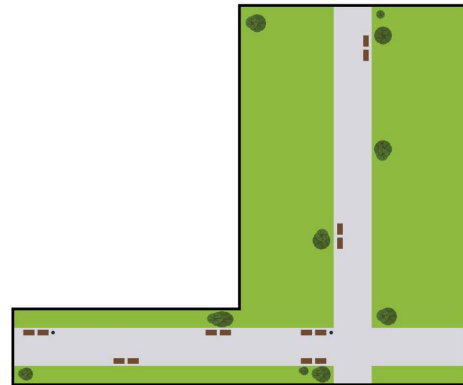
 = 1 m

Opgave 5 Wat is de omtrek? \_\_\_\_\_m




|—| = 10 m

Opgave 6 Wat is de omtrek? \_\_\_\_\_m



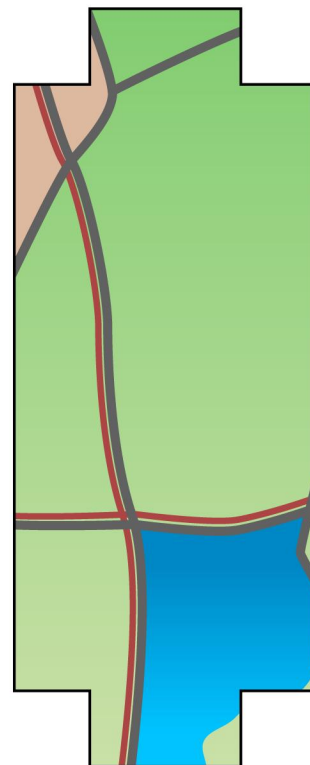
|—| = 2 m

Opgave 7 Wat is de omtrek? \_\_\_\_\_m



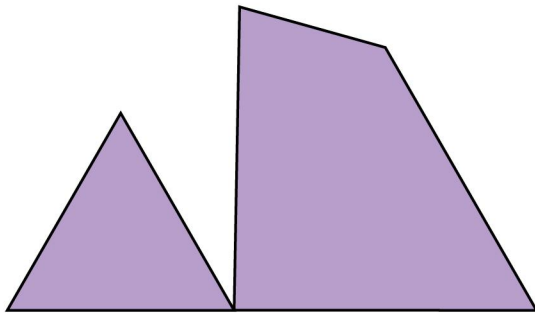
|—| = 1 m

Opgave 8 Wat is de omtrek? \_\_\_\_\_km



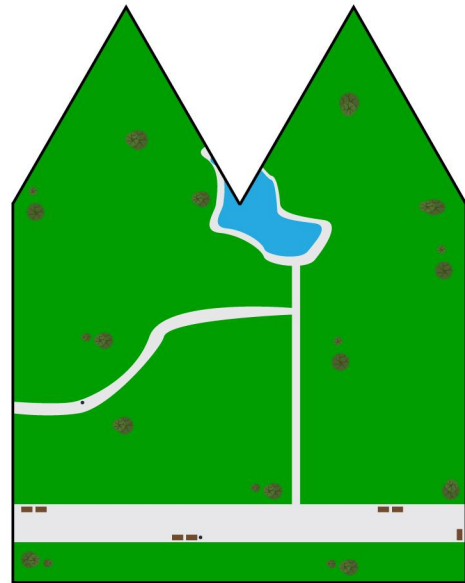
|—| = 2 km

Opgave 9 Wat is de omtrek? \_\_\_\_\_m



—| = 1 m

Opgave 10 Wat is de omtrek? \_\_\_\_\_km



—| = 2 km