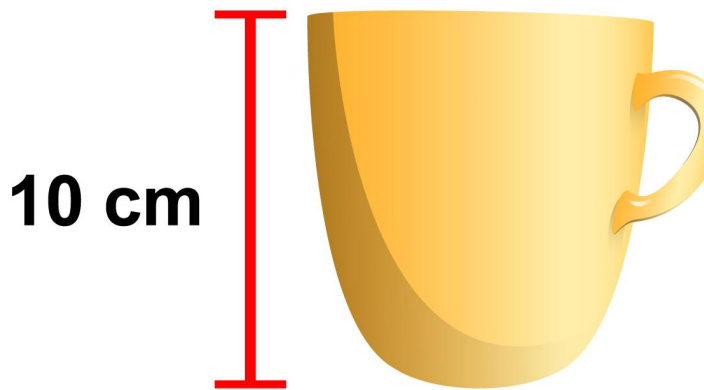


Meten 8B

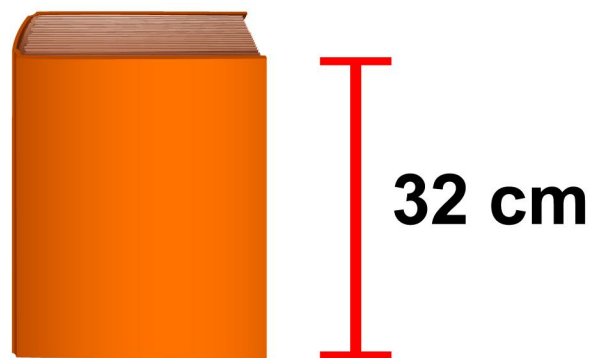
Eiland: Schaal
Doel: Berekenen van de schaal via opmeten



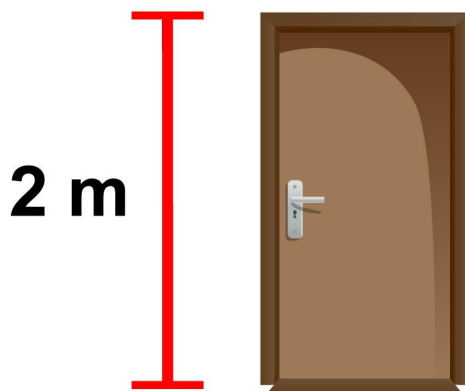
Opgave 1 Wat is de schaal? 1 : _____



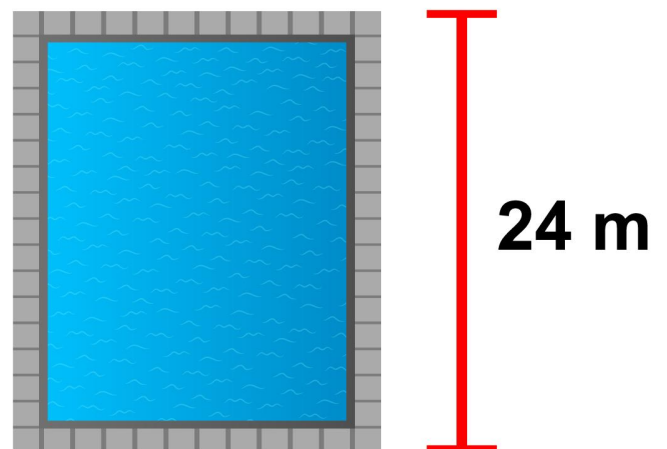
Opgave 2 Wat is de schaal? 1 : _____



Opgave 3 Wat is de schaal? 1 : _____

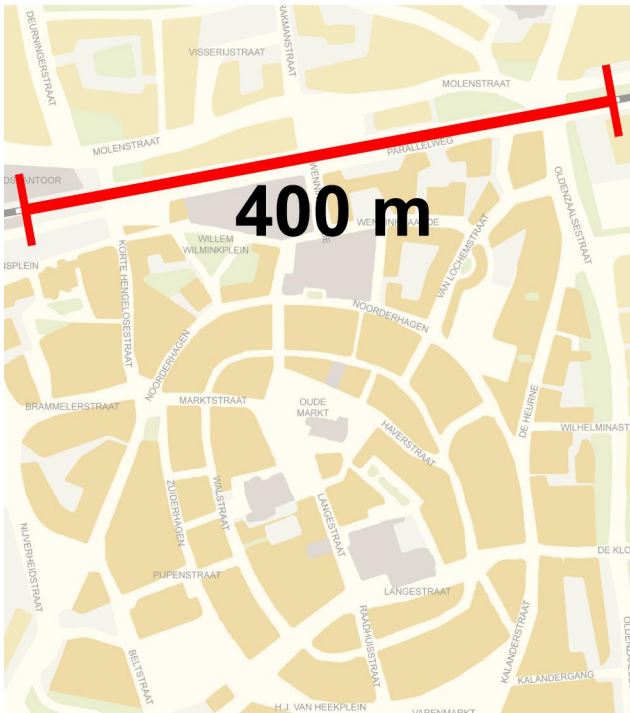


Opgave 4 Wat is de schaal? 1 : _____



Opgave 5 Wat is de schaal? 1 : _____

Opgave 6 Wat is de schaal? 1 : _____



Opgave 7 Wat is de schaal? 1 : _____

Opgave 8 Wat is de schaal? 1 : _____

